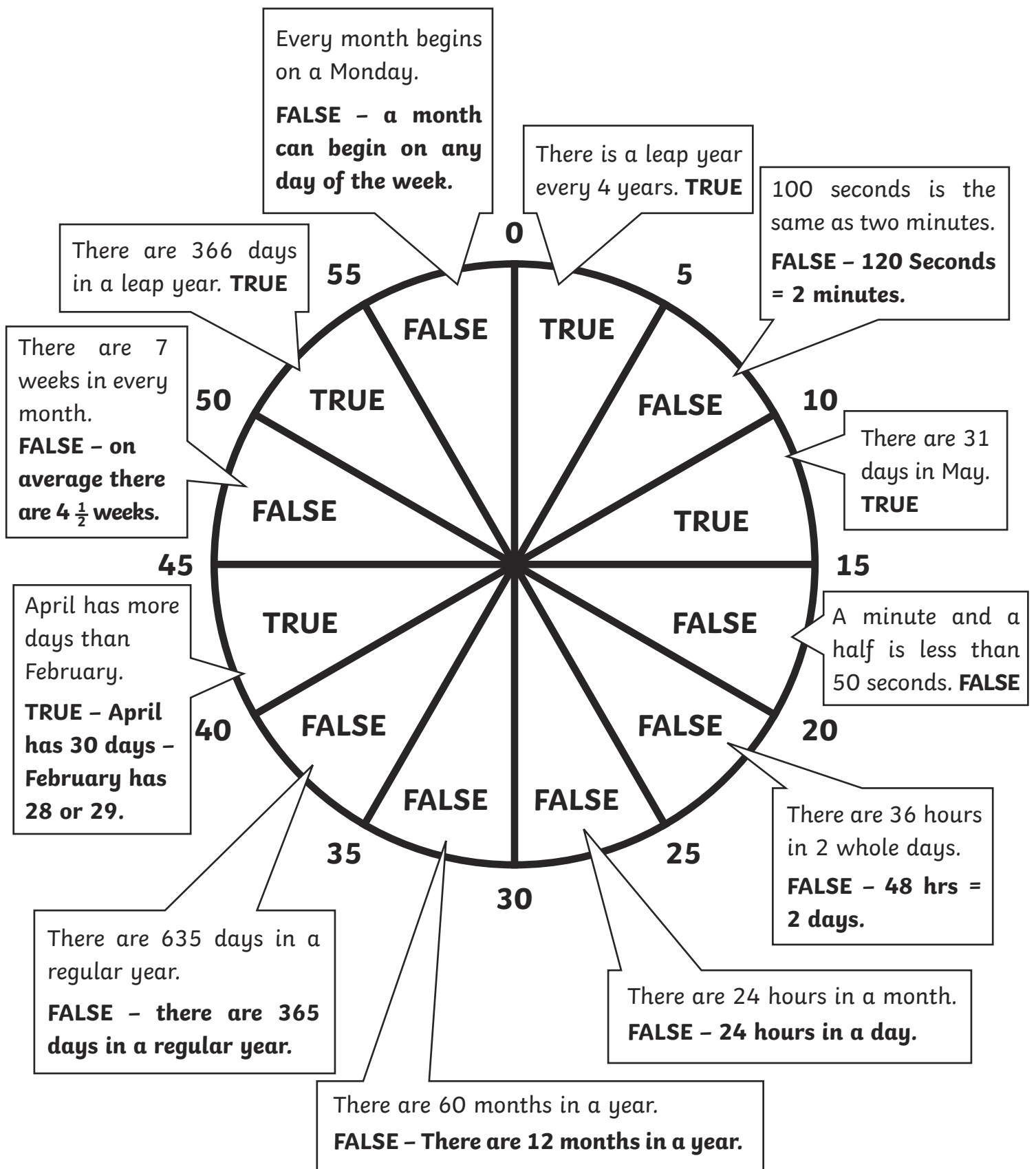



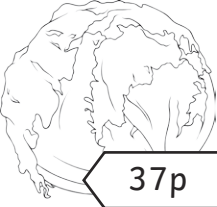





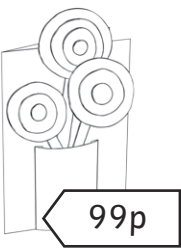


Make a Minute Answers



Check Your Change! - Answers

Check the change the shopkeeper has given you. Are you happy to walk out of the shop with that change or do you need to go back and inform her of a mistake?

You buy	You pay	Your change	'Thanks for my change!' or 'Excuse me!'
	£5.00	£1 10p 10p 1p Change given £1.21 – correct change £1.31	Excuse me!
	£10.00	£5, 10p, 5p Change given £5.15 – correct change £5.25	Excuse me!
	£2.00	20p, 20p, 20p Change given 60p – correct change 65p	Excuse me!
	£20.00	£10, £5, £1, £1, £1, 50p, 10p, 2p, 1p Change given £18.63 – correct change £19.63	Excuse me!
	£5.00	£2, 2p, 2p, 1p Change given £2.05 – correct change £2.05	Thank you for my change!

You buy	You pay	Your change	'Thanks for my change!' or 'Excuse me!'
	£20 £20 £20 £10	1p Change given 1p - correct change given	Thank you for my change!
	£10	50p 50p 50p 20p 10p 5p Change given - £1.85 - correct change £1.85	Thank you for my change!
	£5	£2 £1 £1 1p Change given £4.01 - correct change £4.01	Thank you for my change!
	£10	£5 20p 10p 2p 2p Change given £5.34 - correct change £6.34	Excuse me!
	£5	£1 £1 £1 20p 5p 2p Change given - £3.27 - correct change - £2.27	The shopkeeper has given you too much change! What will you say?

Pals Olympics - Answers

Event One – The Long Jump

Name	Ginger	Zuna	Dusty
Distance	1m 34cm	3m 43cm	3m 9cm
Position	3rd	1st	2nd
Medal	Bronze	Gold	Silver
Points	1	3	2
Points so far	1	3	2

Event Two – Little Finger Weightlifting

Name	Zuna	Ginger	Dusty
Weight	312g	213g	426g
Position	2nd	3rd	1st
Medal	Silver	Bronze	Gold
Points	2	1	3
Points so far	5	2	5

Event Three – Running backwards 100m

Name	Zuna	Dusty	Ginger
Time	26 secs	32 secs	42 secs
Position	1st	2nd	3rd
Medal	Gold	Silver	Bronze
Points	3	2	1
Points so far	8	7	3

Event Four – Leaky bucket challenge (How much water could the pals keep in their buckets after they had completed an obstacle course?)

Name	Dusty	Ginger	Zuna
Water remaining	260ml	360ml	420ml
Position	3rd	2nd	1st
Medal	Bronze	Silver	Gold
Points	1	2	3
Points so far	8	5	11

Competing Times Answers

1. Michael and Roni had a competition to see who could walk to school in the quickest time.

The table shows what time they leave and what time they arrive.

Name	Time left	Time arrived	Time taken	So the winner was...
Michael	7:24	7:56	0:32	Roni
Roni	7:50	8:20	0:30	

2. Michael and Roni both thought their birthday was the closest to Christmas Day.

The table shows when their birthdays are.

Name	Birthday	Christmas Day	Days Away	So the winner was...
Michael	1st December	25th December	24	Roni
Roni	17th January	25th December	23	

3. Michael and Roni both think they played video games for longer than the other at the weekend.

The table shows when they started and finished playing.

Name	Time started	Time finished	Time Spent	So the winner was...
Michael	8:00 am	1:00 pm	5:00	Michael
Roni	11:00 am	3:30 pm	4:30	

4. Michael and Roni both think they can estimate exactly a minute with their eyes closed.

The table below shows how close their estimates were...

Name	Aim	Actual Estimate	Seconds away	So the winner was...
Michael	60 seconds	1 min 33 seconds	33 seconds	Roni
Roni	60 seconds	37 seconds	23 seconds	

5. Michael and Roni both think they can keep their hands in ice cold water for the longest.



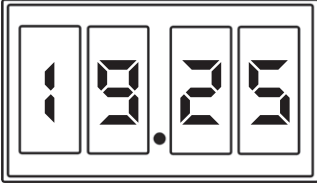
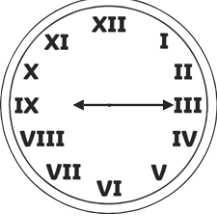
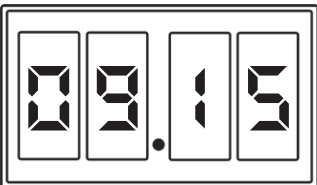
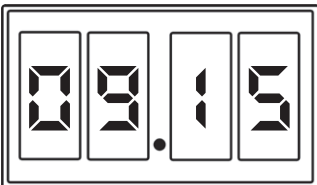
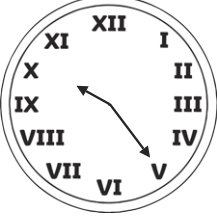
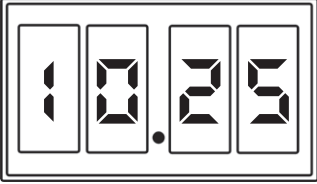
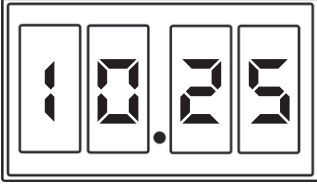
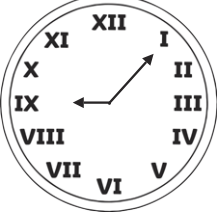

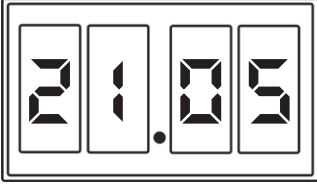






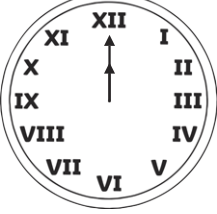

The table below shows how long they managed...

Name	Time started	Time Finished	Total time	So the winner was...
Michael	10:55:17	10:56:01	0:00:44	Roni
Roni	11:01:35	11:02:20	0:00:45	

And the overall winner was... **Roni!**

Changing Times Answer

Use the information to fill out the missing boxes in this table – the first one has been done for you.

Time with Roman Numerals	Digital Time	a.m./p.m.	24-Hour Clock
		a.m./p.m.	
		a.m./p.m.	
		a.m./p.m.	
		a.m./p.m.	
		a.m./p.m.	
		Noon	
		Midnight	